

# Unit 5 Math Assessment

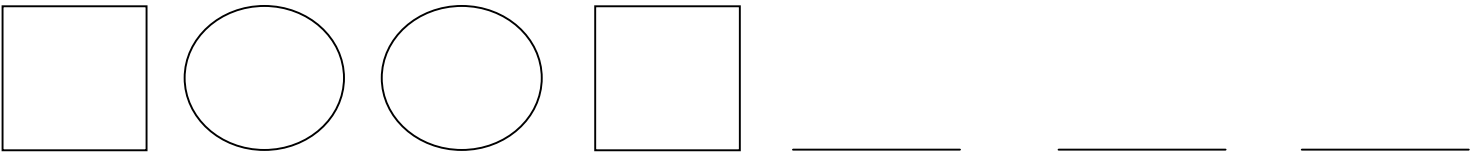
Name: \_\_\_\_\_ Date: \_\_\_\_\_

1. Put the numbers in order from **lowest** to **highest**.

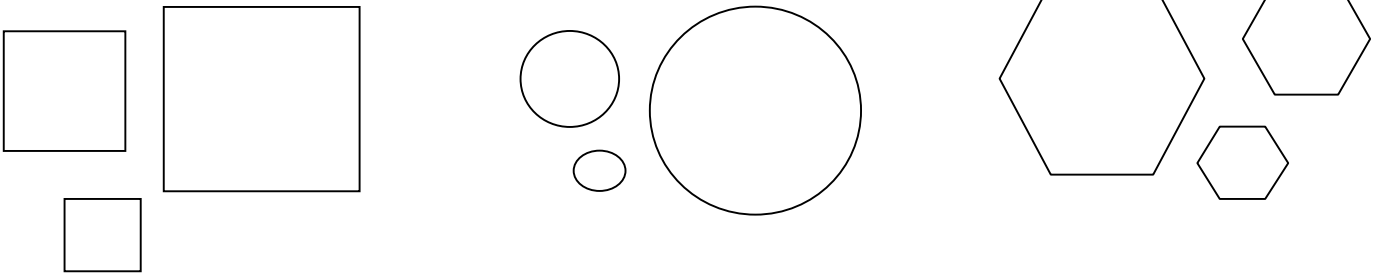
**1**      **3**      **0**      **2**      **5**      **4**

\_\_\_\_\_

2. Complete the pattern below.



3. How are the objects below sorted? Circle your answer below.



shape

size

4. Which one of these is a standard foot?

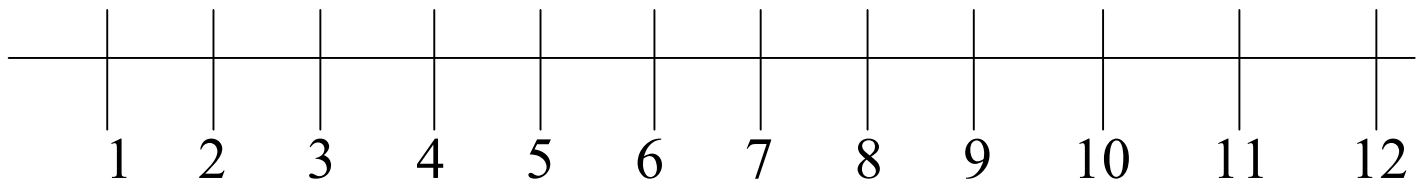
**a ruler**



**your foot**



5. Use the number line to answer the following questions.



What number is between 5 and 7? \_\_\_\_\_

What number is two hops more than 10? \_\_\_\_\_

What number is 3 hops less than 8? \_\_\_\_\_

6. Counting by 5's

**5    10    15**    \_\_\_\_\_    \_\_\_\_\_    \_\_\_\_\_    \_\_\_\_\_

7. Counting by 10's

**10    20    30**    \_\_\_\_\_    \_\_\_\_\_    \_\_\_\_\_    \_\_\_\_\_

7. Draw what 6 tally marks would look like below.

8. Use the calendar to answer the following questions.

Sunday	Monday	Tuesday	Wednesday	Thursday	Friday	Saturday
				1	2	3
4	5	6	7	8	9	10
11	12	13	14	15	16	17
18	19	20	21	22	23	24
25	26	27	28	29	30	31


What **month** does this calendar show? \_\_\_\_\_

What **year** does this calendar show? \_\_\_\_\_

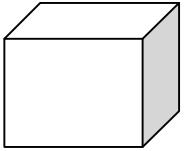
What day of the week was October 9<sup>th</sup>? \_\_\_\_\_

9. Write today's date in numbers.

10. Draw a line to match the shapes to their name.




**sphere**



**cone**



**cylinder**



**cube**